

Name: _____

Nouns

Cut out the noun tiles at the bottom of the page. Glue them into the box under the correct type of noun.

People	Places	Things

Super Teacher Worksheets - www.superteacherworksheets.com

grandma	pencil	water
country	woman	city
tree	cloud	book
teacher	store	office
rock	state	policeman
baby	singer	playground

Name: _____

2-Digit Addition without Regrouping

Addition

Find the sums.

a.
$$\begin{array}{r} 32 \\ + 15 \\ \hline \end{array}$$

b.
$$\begin{array}{r} 44 \\ + 34 \\ \hline \end{array}$$



c.
$$\begin{array}{r} 41 \\ + 10 \\ \hline \end{array}$$

d.
$$\begin{array}{r} 20 \\ + 29 \\ \hline \end{array}$$

e.
$$\begin{array}{r} 62 \\ + 6 \\ \hline \end{array}$$

f.
$$\begin{array}{r} 72 \\ + 26 \\ \hline \end{array}$$

g.
$$\begin{array}{r} 34 \\ + 23 \\ \hline \end{array}$$

h.
$$\begin{array}{r} 5 \\ + 61 \\ \hline \end{array}$$

i.
$$\begin{array}{r} 54 \\ + 20 \\ \hline \end{array}$$

j.
$$\begin{array}{r} 83 \\ + 16 \\ \hline \end{array}$$


- k. Ken has 25 toy cars.
Tim has 13 toy cars.
How many toy cars do they have altogether? _____

- l. Sara has 34 dolls.
She buys 3 more.
How many dolls does she have in all? _____

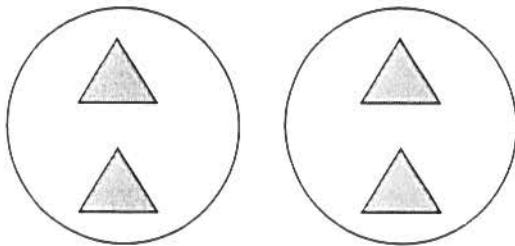
Name _____

Date _____

1.




Divide 4 triangles into groups of 2.



There are _____ groups of 2 triangles.

$$4 \div 2 = 2$$

2.



Divide 9 eggs into groups of 3.

There are _____ groups.

$$9 \div 3 = \underline{\hspace{2cm}}$$


3.



Divide 12 buckets of paint into groups of 3.

$$12 \div 3 = \underline{\hspace{2cm}}$$

4.



Group the squares to show $15 \div 5 = \underline{\hspace{2cm}}$
where the unknown represents the number of groups.

How many groups are there? _____

5. Daniel has 12 apples. He puts 6 apples in each bag. Circle the apples to find the number of bags Daniel makes.



- a. Write a division sentence where the answer represents the number of Daniel's bags.
- b. Draw a number bond to show Daniel's apples.
6. Jacob is drawing cats. He draws 4 legs on each cat, and a total of 24 legs.
- a. Use a count-by to find the number of cats Jacob draws. Make a drawing to match your counting.
- b. Write a division sentence to represent the problem.



Post-It Page!

Complete 4 Post-It notes from the book you're reading.

You might write: a great word choice, place where it shows the character's feeling, a place where you were confused, a place where you had a question, a place where you can see a character changing, a place where you had a prediction.

Jot your thought on the Post-It note. Write the page number it came from. Stick the note on this page.

Example: An interesting word is _____. It means _____.

When you get this homework packet returned to you, you'll put these notes into your Reading Notebook.



Writing Assignment

For homework this week, you will need to write in your writing journal.

What will you write about? You may write about **any topic** that you interests you - fiction OR non fiction!

- * Find the **best place** to sit with your writing journal.
- * Think about **1 topic** that you have some ideas for. (fiction or non fiction)
- * Once you have **some ideas**, write for **15 minutes** in your journal.

Remember, **thinking** is a part of writing!